



EXAMINATIONS COUNCIL OF ESWATINI
Eswatini Primary Certificate Examination

CANDIDATE
NAME

CENTRE
NUMBER

--	--	--	--

CANDIDATE
NUMBER

--	--	--	--

PRACTICAL ARTS AND TECHNOLOGY

640/02

October/November 2023

Paper 2

2 hours

READ THESE INSTRUCTIONS FIRST

Write your candidate name, centre number and candidate number on the spaces provided.
Write your answers using a **dark blue** or **black pen** in the spaces provided.
Do **not** use tipp-ex for erasing.

This paper consists of **four (4)** sections; (**A, B, C** and **D**).
Answer all questions in sections **A, B, C** and **D**.
All drawings, graphs and tables should be done in pencil.

INFORMATION

The total mark for this paper is 100.
The number of marks is given in [] at the end of each question.

For Examiner's use	
Section A	
Section B	
Section C	
Section D	
TOTAL	

This document consists of **8** printed pages.

SECTION A
ARTS AND CRAFT

QUESTION 1

(a) List the **three** (3) secondary colours.

(i)[1]

(ii)[1]

(iii).....[1]

(b) What **moods** are represented by the colour red:

(i)[1]

(ii)[1]

(c) Study the picture below then answer the questions that follow.



(i) What is the name of the product above?

.....[1]


(ii) Name **two** other materials that can be used when moulding the product in the picture above.

.....
.....[2]

(iii)Suggest any social environmental effect of making the product above.

.....
.....[2]

(d) On the space below, draw, name and colour a woven product.



Name.....

[4]

(e) Differentiate between reusing and recycling, giving one example for each.

Difference.....

.....[2]

Example.....

Example.....[2]

(f) Explain why plain wooden products should not be kept in water for a long time.

(i)


(ii)[2]

[20 marks]

SECTION B
MUSIC AND DRAMA

QUESTION 2

(a) Study the pictures and fill in the table below.



Picture A



Picture B

Picture	Dance Style	Instrument/Body percussion	Costume
A			
B			

[6]

(b) Explain the importance of song and dance in the Swazi culture.

(i)

(ii) [2]

(c) Study the picture below and answer the questions that follow:



(i) Name the performance shown in the picture above

..... [1]

(ii) Identify **two** stage props shown in the picture

.....
.....[2]

(iii) Find **two** things that are wrong with the picture in terms of Swazi Cultural practices.

.....
.....[2]

(iv) Define the following terms.

Melody.....[1]

Script..... [1]

(d) (i) Give any **three** key things that you should consider when preparing for a performance.

.....
.....
.....[3]

(ii) Choose **one** from the above list and explain its importance in a performance.

.....
.....[2]

[20 marks]

SECTION C
ENTREPRENEURSHIP

QUESTION 3

(a) Study the picture and answer the questions that follow.



(i) Name **two** raw materials needed for making the product shown in the picture.

.....
.....[2]

(ii) What is the challenge of having such a business especially in summer?

.....[1]

(iii) Identify **two** overhead costs that are key for the business in the picture

.....[2]

(b) Mr Zubuko is having troubles with his farming business, he doesn't attend workshops and does not research more about his business. He also went to a bank to request for a loan and he was not granted the loan because he kept records in his head.

(i) Identify **two** of Mr Zubuko's problems

.....
.....[2]

(ii) Explain how Mr Zubuko can improve his business. Give **two** points

.....
.....[2]

(c) Define the following terms.

Micro lender.....
.....[1]

Capital.....
.....[1]

(d) Explain the importance of budgeting. Give **two** reasons.

.....
.....[2]

(e) Record the following information on the cash book below that took place on July 2023:

- (i) July 6 : sold goods for cash E 500
- (ii) July 8 : bought goods for cash E 200
- (iii) July 10 : purchased goods for cash E 50
- (iv) July 15 : Sold goods for cash E 155

CASH BOOK ACCOUNT

Date	Details	Cash in		Cash out	
		E	C	E	C
	Total Cash in (from sales)				
Less	Total cash out				
	Net cash in				

[7]
[20 marks]

SECTION D
TECHNOLOGICAL DESIGN

QUESTION 4

(a) Packaging products is the last stage in production. State any **three** things that should appear on the packaging box.

(i)

(ii)

(iii).....[3]

(b) In stage 2 of the technological design process, there are seven key things that the producer should take note of, list any **four** of the seven things.

(i)

(ii)

(iii).....

(iv).....[4]

(c) Identify any **three** ways of finishing when making products.

(i)

(ii)

(iii).....[3]

(d) Differentiate between tools and materials.

.....


.....[2]

(e) Discuss the difference between renewable and non-renewable sources of energy?

.....

.....[2]

(f) On the space below draw a poster to advertise a concert that will be in your school.



[6]
[20 marks]

BLANK PAGE

Permission to reproduce items where third party owned material protected by copyright is included has been sought and cleared where possible. Every reasonable effort has been made by the publisher (ECESWA) to trace copyright holders, but if any items requiring clearance have unwittingly been included, the publisher will be pleased to make amends at the earliest possible opportunity.